

Model Answer

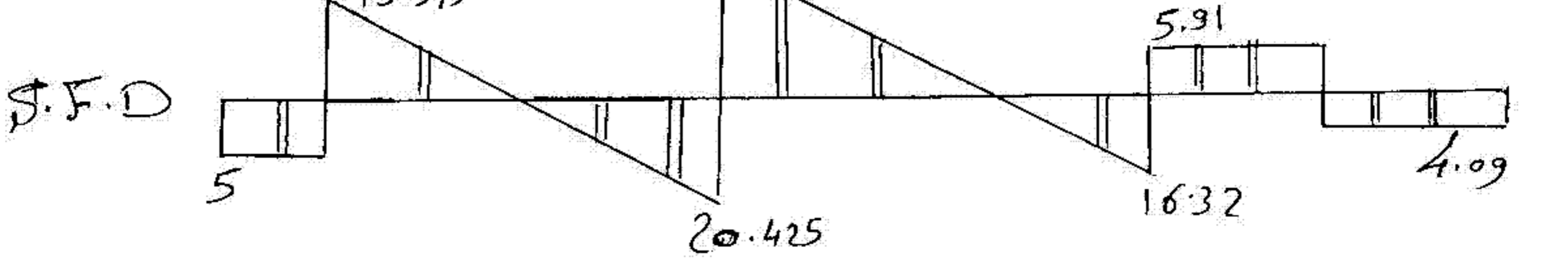
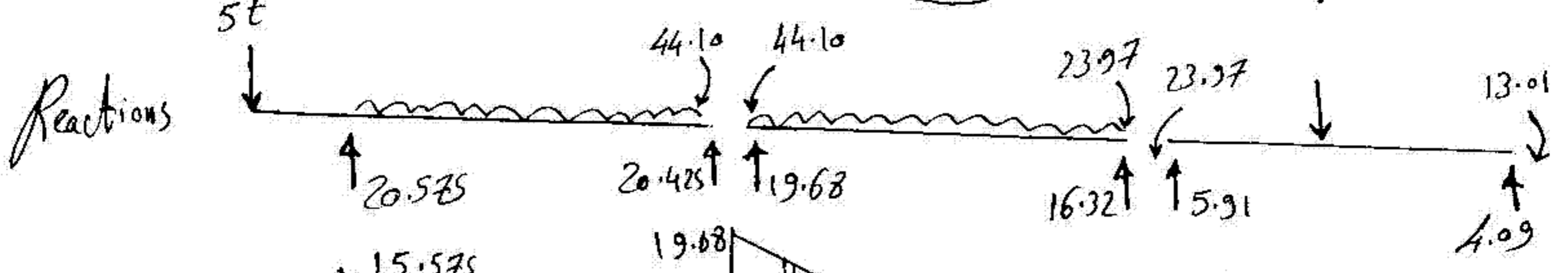
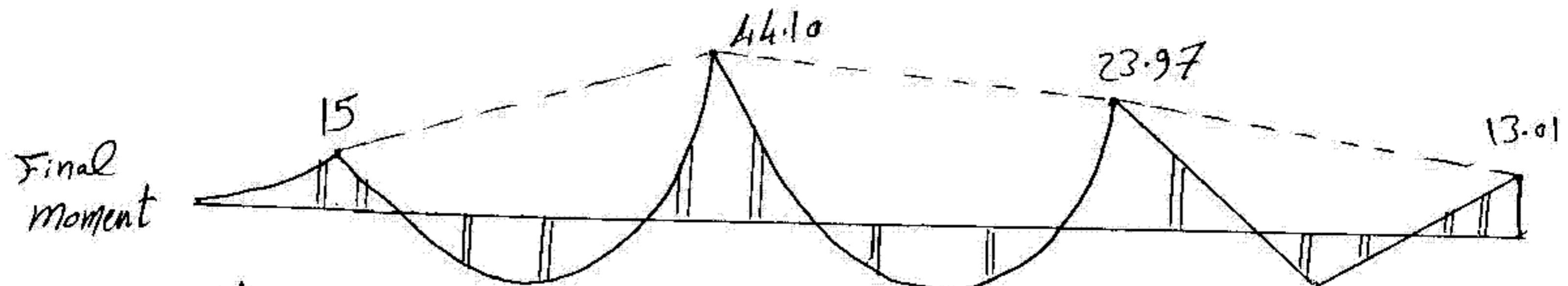
Structural Analysis and Mechanics

3rd year CIVIL

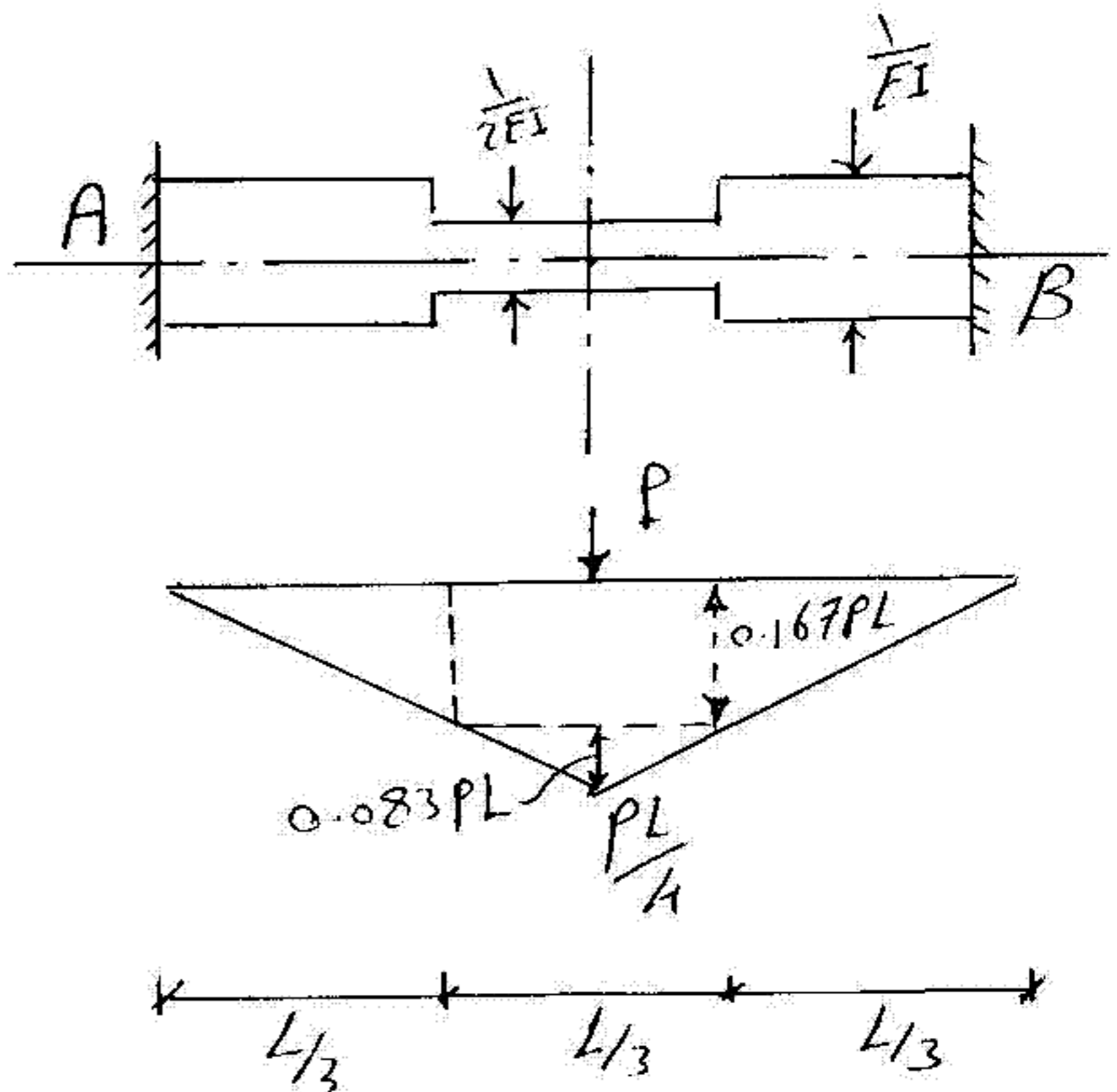
1st term exam 2003-2010

Question (1)

D.F		0.43	0.57	0.5	0.5	
F.E.M	+15	-46.5	+36	-36	+13.33	-18.33
B.M	0	4.515	5.985	11.33	11.33	0.0
C.o.M	0.0	0.0	5.665	2.99	0.0	5.665
B.M	0.0	-2.44	-3.23	-1.495	-1.495	0
C.o.M	0.0	0.0	-0.7475	-1.615	0.0	-0.7475
B.M	0.0	0.321	0.426	0.8075	0.8075	0.0
	+15	-44.10	44.10	-23.97	23.97	-13.01



Question (2)



$$\begin{aligned}
 A &= \frac{L}{3} \left(\frac{1}{EI} \right) * 2 \\
 &+ \frac{L}{3} \left(\frac{1}{2EI} \right) \\
 &= \frac{5L}{6EI}
 \end{aligned}$$

$$I_y = 0.08179 \frac{L^3}{EI}$$

$$N = -0.09025 \frac{PL^2}{EI}$$

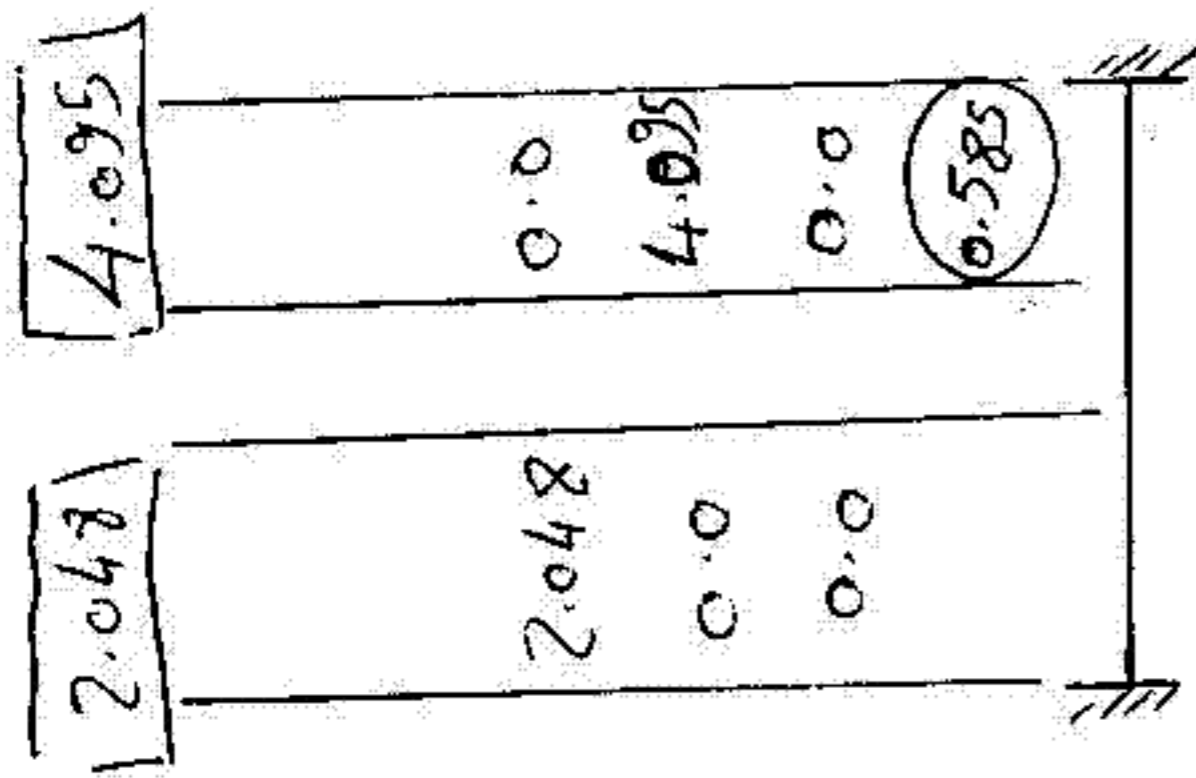
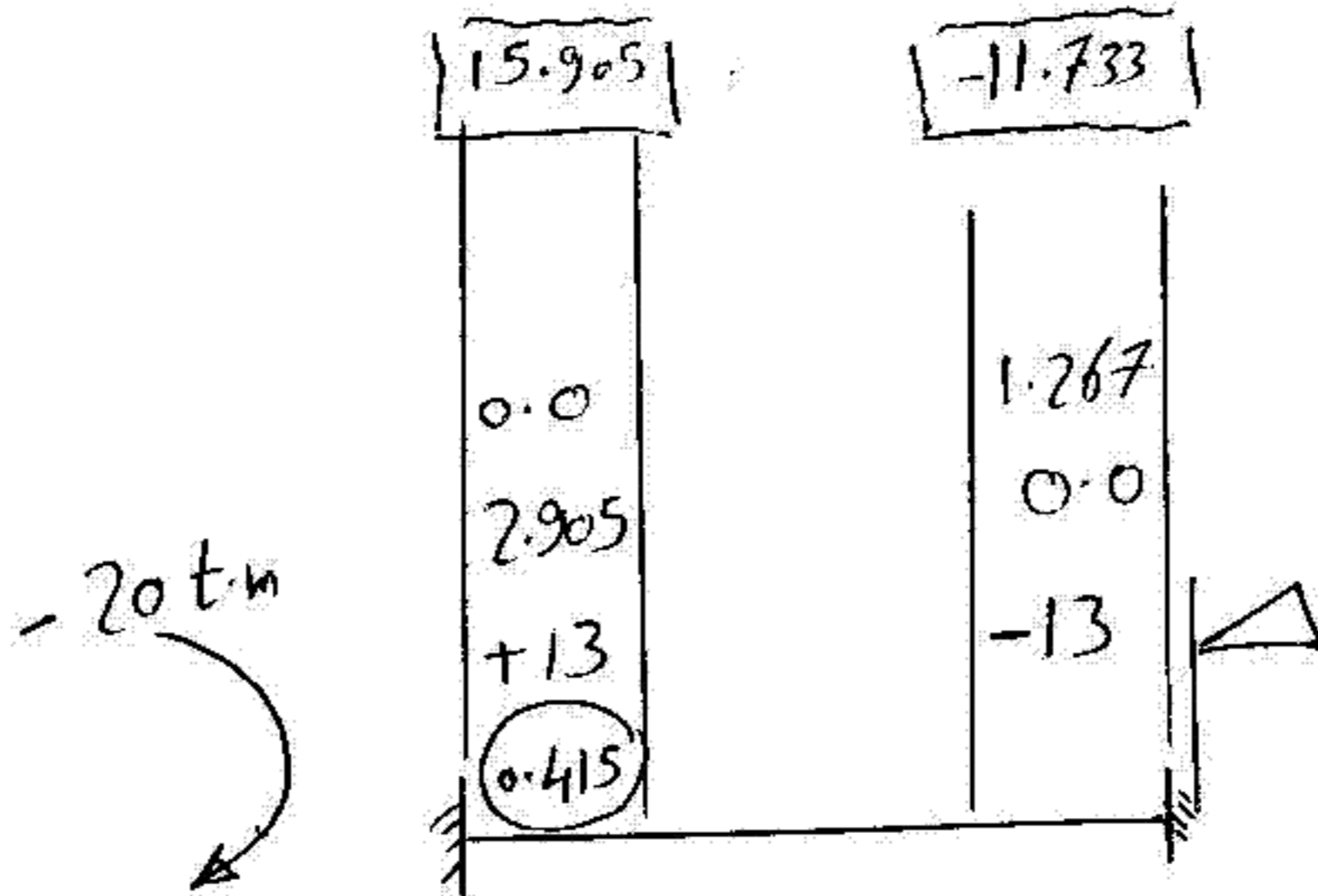
$$\begin{aligned}
 * M_A = \text{Fixed end moment at A} &= \frac{N}{A} \\
 &= -0.108 PL
 \end{aligned}$$

* Stiffness at A: Unit load at A

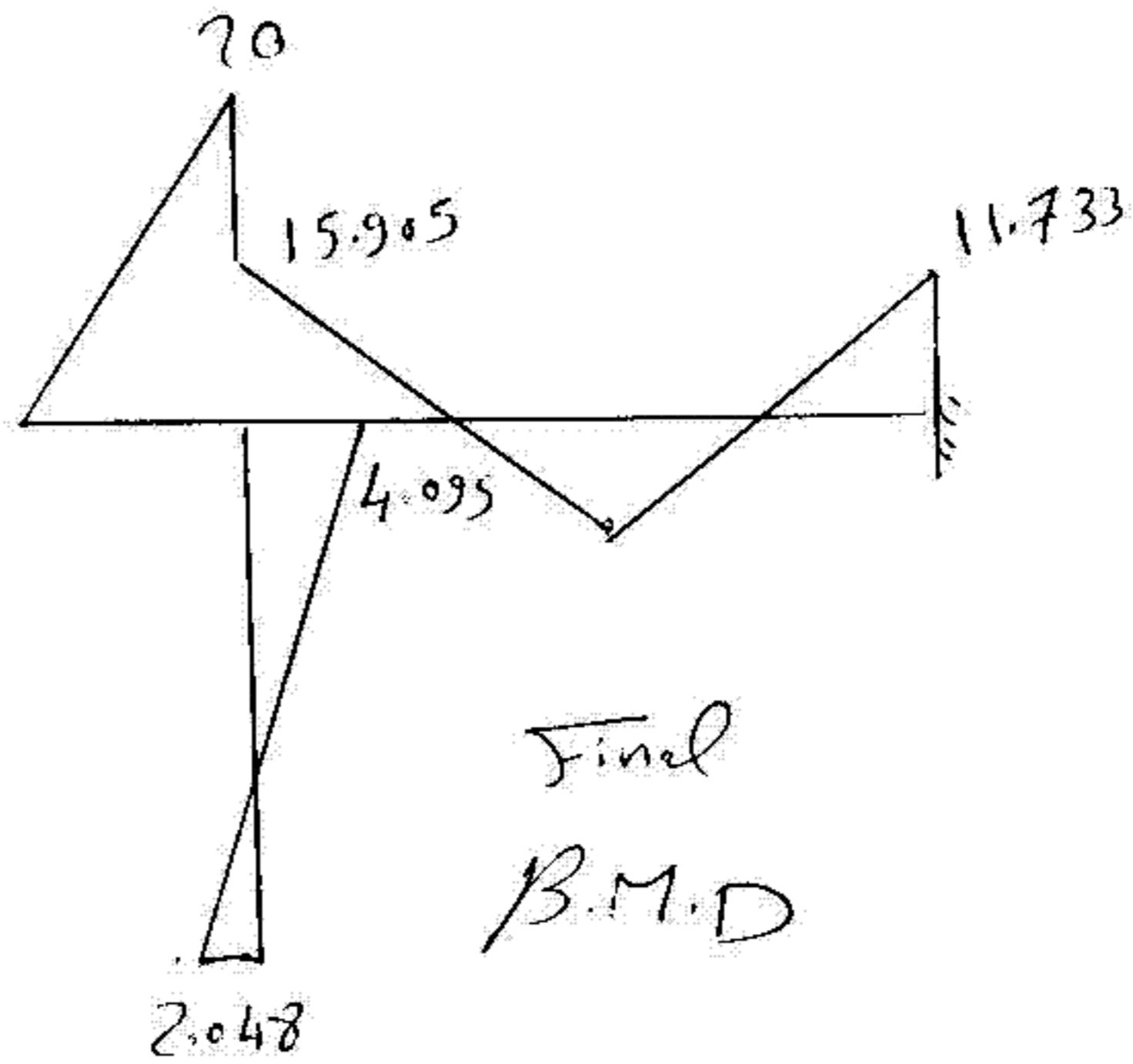
$$M_A = \text{stiffness} = 4.26 \frac{EI}{L}$$

$$* \text{Carry over factor} = \frac{M_B}{M_A} = 0.436$$

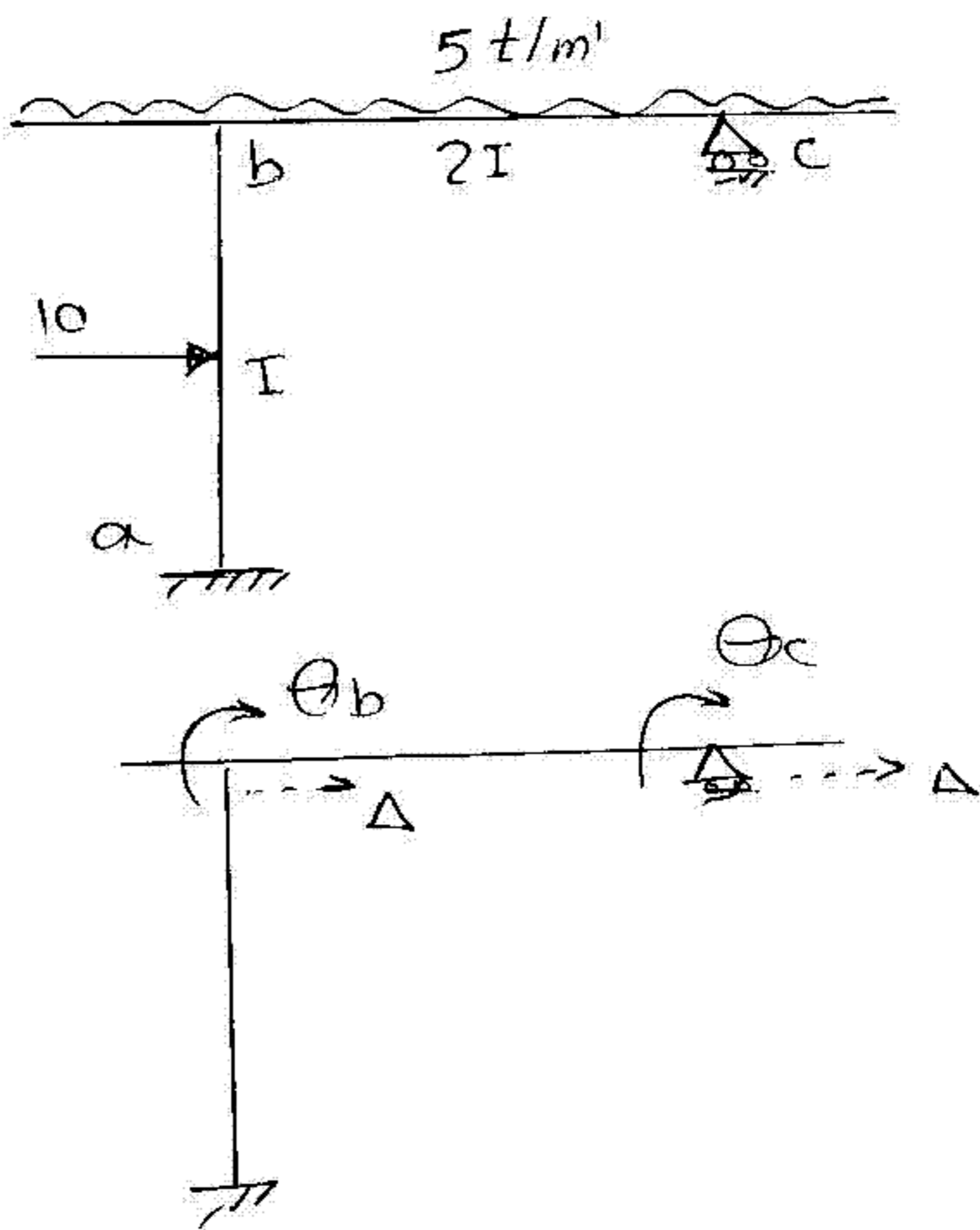
Question (3)



Zero moment



Question (4)



$$M_{ab} = \frac{2EI}{6} \left[0 + \theta_b - \frac{3\Delta}{6} \right] - 7.50$$

$$M_{ba} = \frac{2EI}{6} \left[2\theta_b - \frac{3\Delta}{6} \right] + 7.50$$

$$M_{bc} = \frac{2E(2I)}{6} \left[2\theta_b + \theta_c \right] - 15$$

$$M_{cb} = \frac{2E(2I)}{6} \left[2\theta_c + \theta_b \right] + 15$$

* Equilibrium equations

$$M_{bc} + M_{ba} + 10 = 0.0$$

$$M_{cb} - 10 = 0.0$$

$$\frac{M_{ba} + M_{ab}}{\delta} + 5 = 0.0$$

$$* \quad \Delta = \frac{128.57}{EI}$$

$$\theta_b = \frac{12.857}{EI}$$

$$\theta_c = \frac{-10.18}{EI}$$

$$* \quad M_{ab} = -24.64 \text{ t}\cdot\text{m}$$

$$M_{ba} = -5.357 \text{ t}\cdot\text{m}$$

$$M_{bc} = -4.644 \text{ t}\cdot\text{m}$$

$$M_{cb} = 10.0 \text{ t}\cdot\text{m}$$

